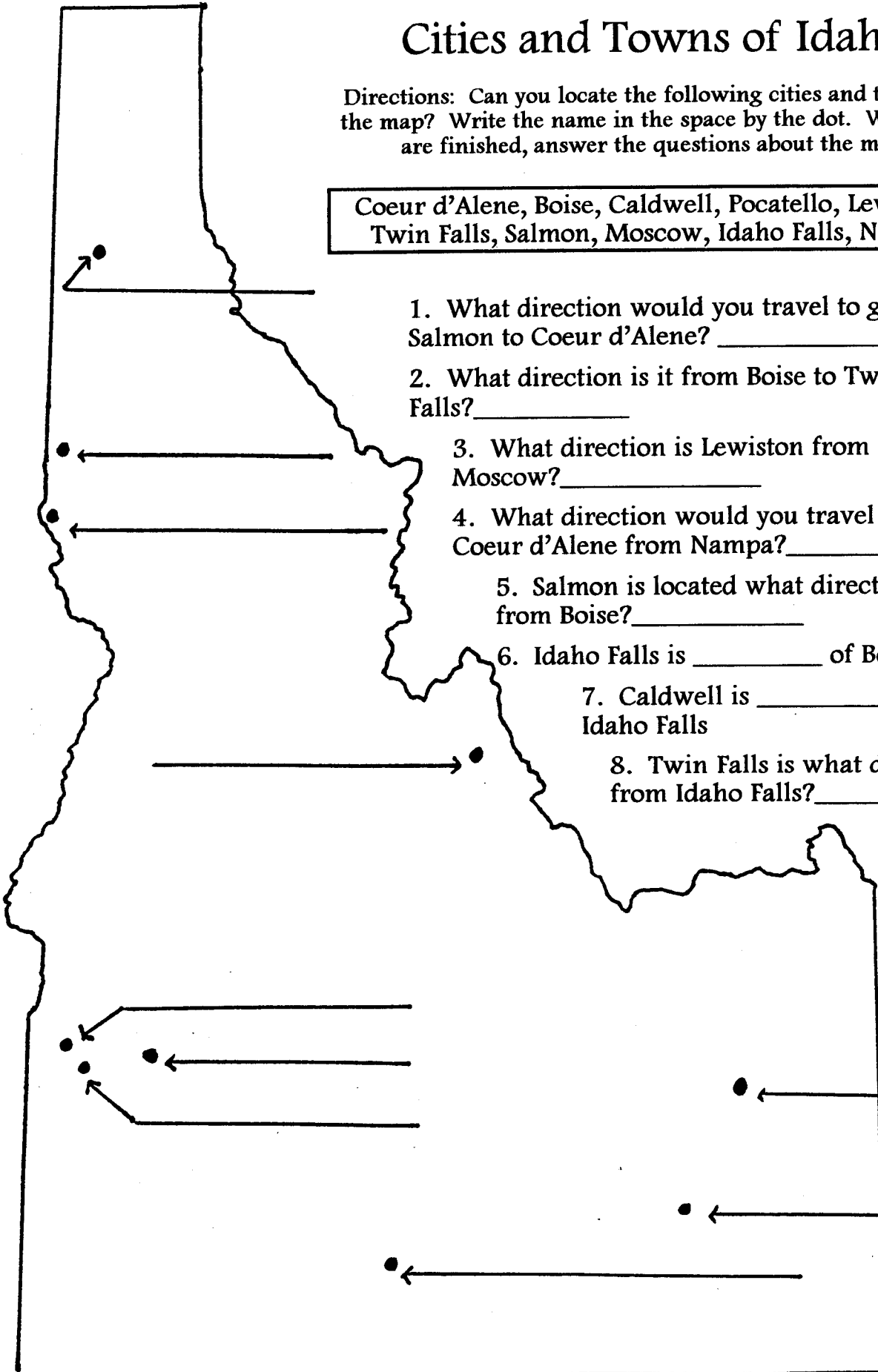


Cities and Towns of Idaho

Directions: Can you locate the following cities and towns on the map? Write the name in the space by the dot. When you are finished, answer the questions about the map.

Coeur d'Alene, Boise, Caldwell, Pocatello, Lewiston, Twin Falls, Salmon, Moscow, Idaho Falls, Nampa



1. What direction would you travel to get from Salmon to Coeur d'Alene? _____

2. What direction is it from Boise to Twin Falls? _____

3. What direction is Lewiston from Moscow? _____

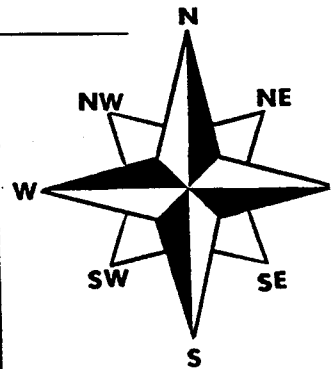
4. What direction would you travel to get to Coeur d'Alene from Nampa? _____

5. Salmon is located what direction from Boise? _____

6. Idaho Falls is _____ of Boise.

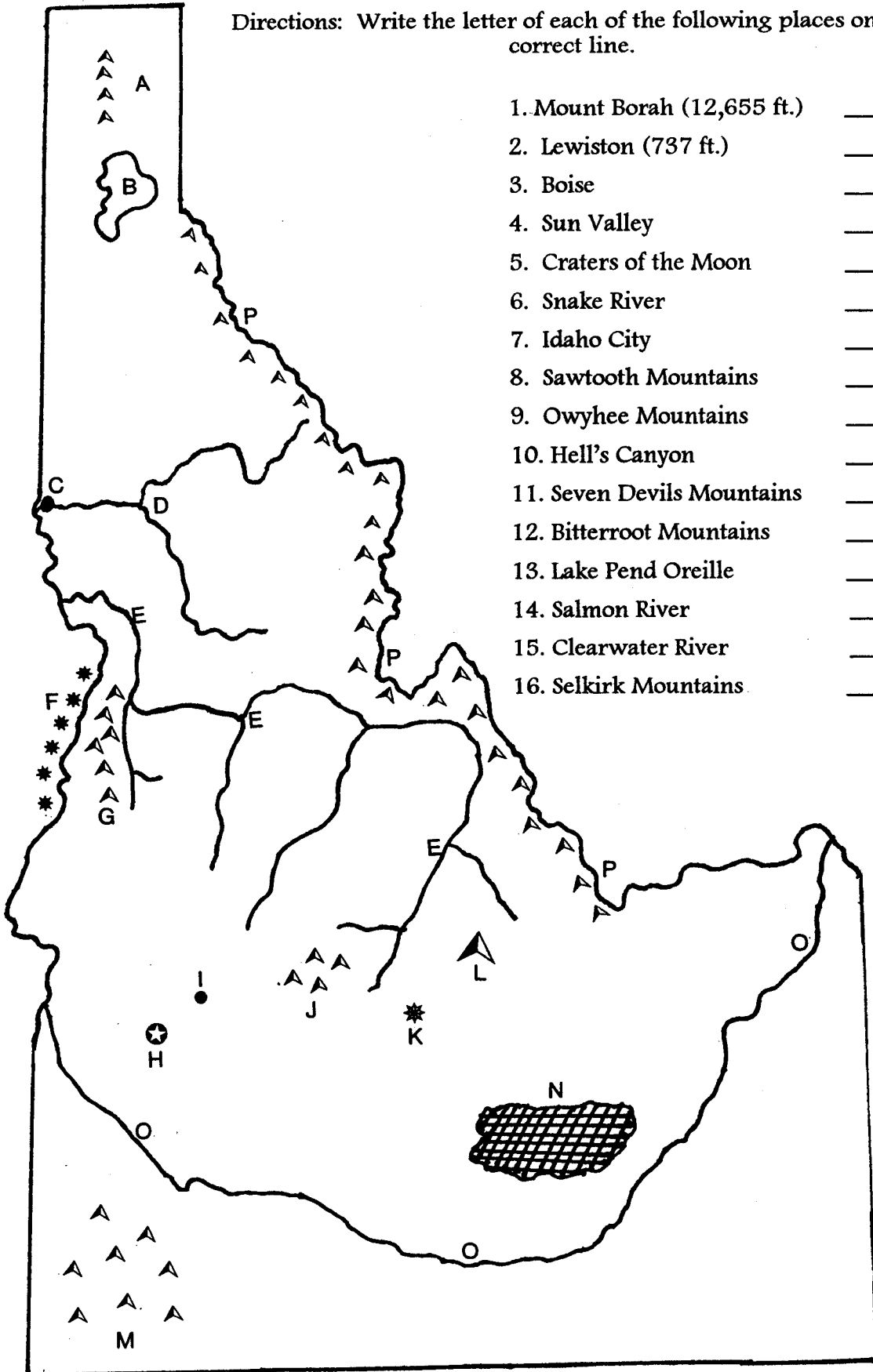
7. Caldwell is _____ of Idaho Falls

8. Twin Falls is what direction from Idaho Falls? _____



Where Is It?

Directions: Write the letter of each of the following places on the correct line.

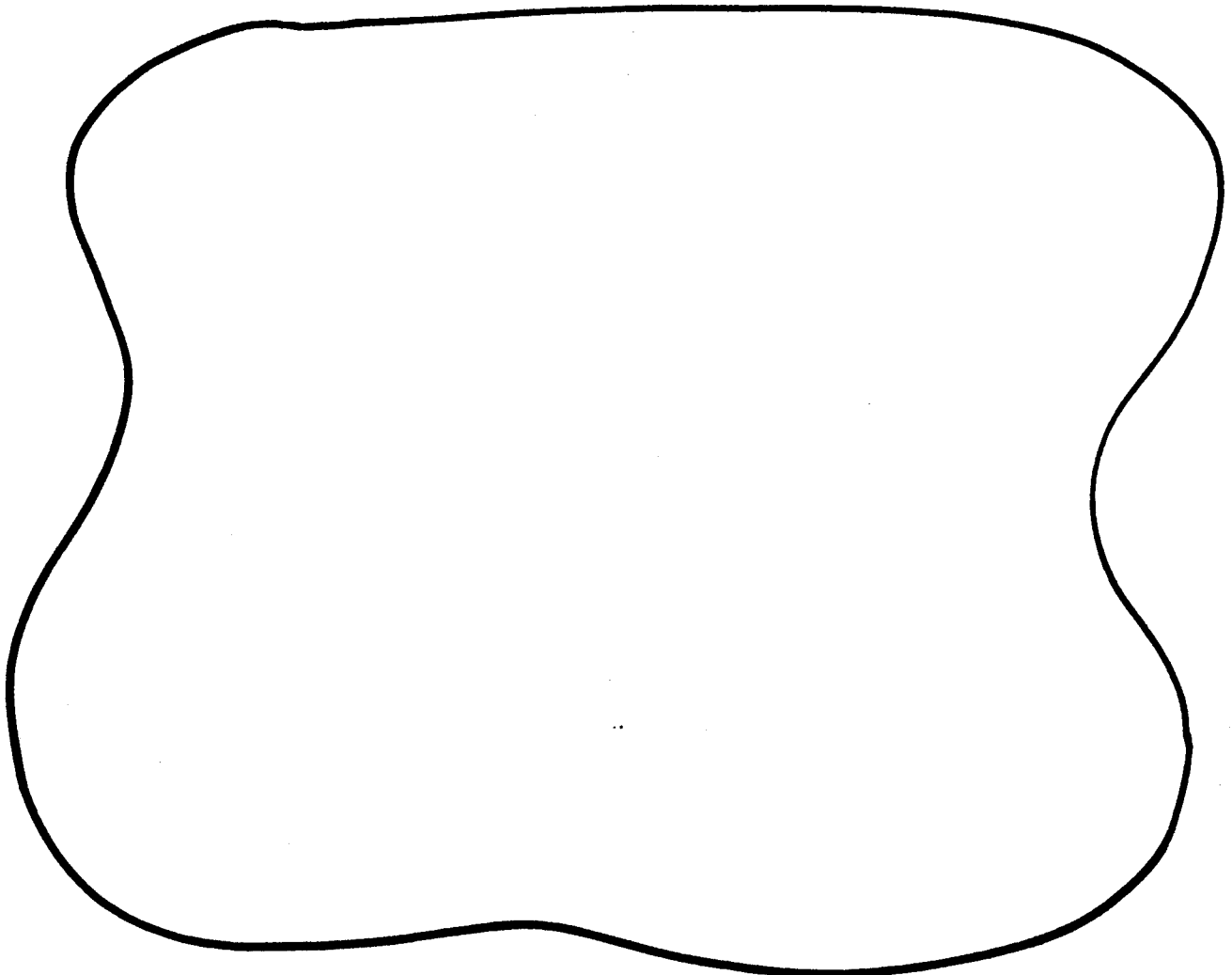


1. Mount Borah (12,655 ft.) _____
2. Lewiston (737 ft.) _____
3. Boise _____
4. Sun Valley _____
5. Craters of the Moon _____
6. Snake River _____
7. Idaho City _____
8. Sawtooth Mountains _____
9. Owyhee Mountains _____
10. Hell's Canyon _____
11. Seven Devils Mountains _____
12. Bitterroot Mountains _____
13. Lake Pend Oreille _____
14. Salmon River _____
15. Clearwater River _____
16. Selkirk Mountains _____

Do It Yourself Map

Directions: You have just been given a piece of land on which to build a city. You need to decide what will be in your city and where these things will be located. Make sure you include streets, houses, rivers, railroad tracks, churches, schools, parks, stores, etc. As you design your city, make sure you complete your legend so others will be able to understand your map.

🏠 = House	Legend
-----------	--------



Interesting Names

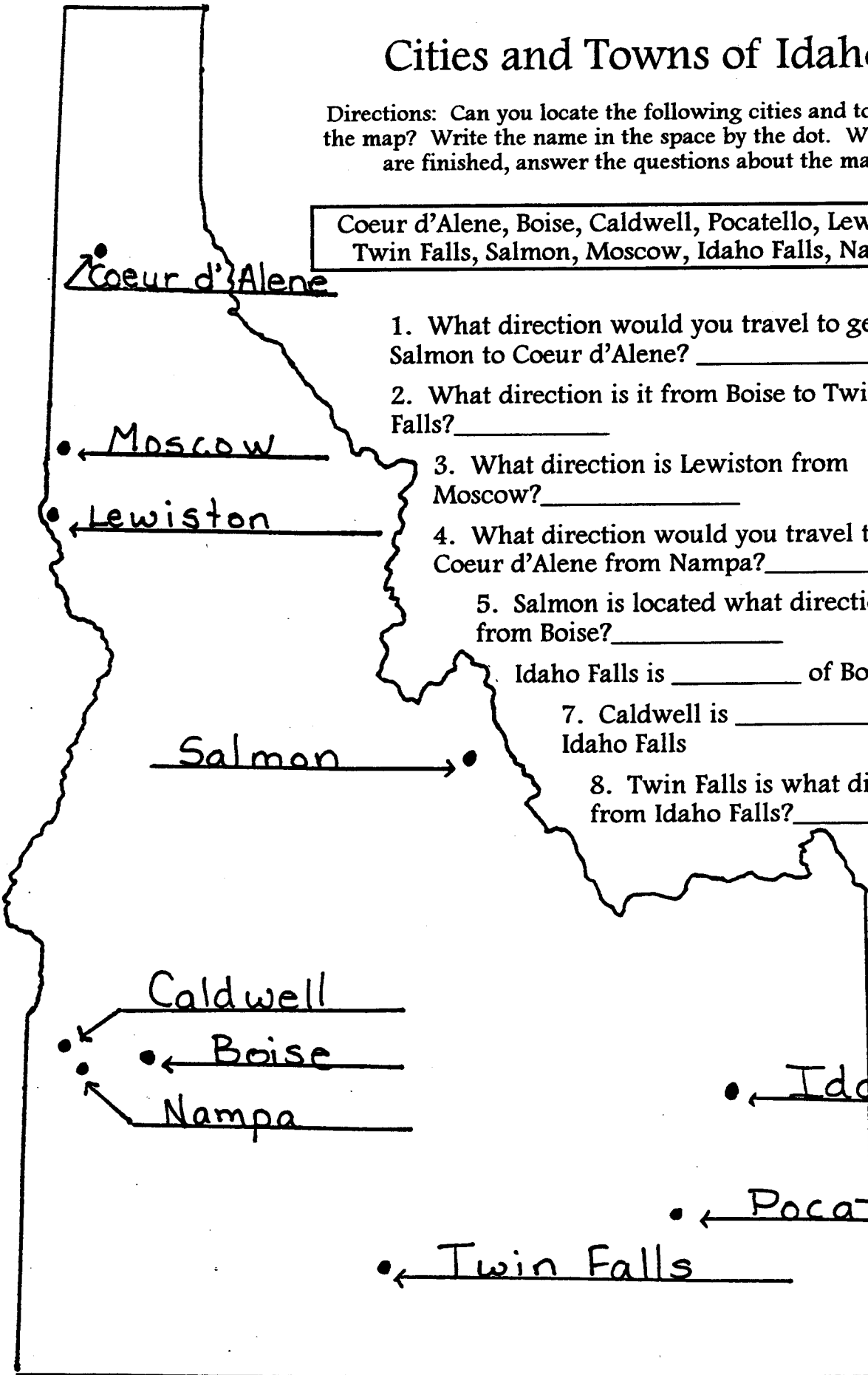
Can you discover the city or town from the clues? Use an Idaho road map to help you with the names.

1. Very, very happy _____
2. Found in the sky at night _____
3. A fish _____
4. Our state -tumbling down _____
5. Where your money earns interest _____
6. Honey tastes very _____
7. My house in the high hills _____
8. A large sight _____
9. The bill collector says you must _____
10. The opposite of tamer _____
11. President during the Civil War _____
12. A group of people elected to help run a city _____
13. To squat down low _____
14. The capital of France _____
15. The bird that is our national symbol _____
16. Put this on cereal to make it sweet _____
17. One of our founding fathers _____
18. Brothers, the same age, trip _____
19. Bouncing pop _____
20. A snowy-colored fowl _____
21. Thanks before a meal _____
22. A storage place for dishes _____
23. A pen for horses _____
24. Food for horses in a bear's home _____
25. A special place for plants in a large town _____
26. The winner of a race is the _____
27. The tip of a spikey dune _____
28. What the baseball coach says to the outfielders _____

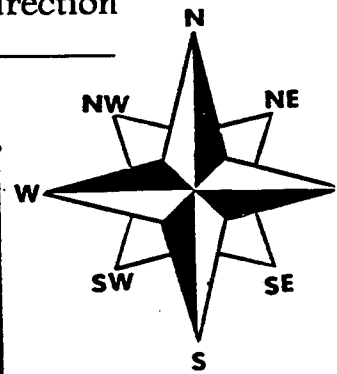
Cities and Towns of Idaho

Directions: Can you locate the following cities and towns on the map? Write the name in the space by the dot. When you are finished, answer the questions about the map.

Coeur d'Alene, Boise, Caldwell, Pocatello, Lewiston, Twin Falls, Salmon, Moscow, Idaho Falls, Nampa

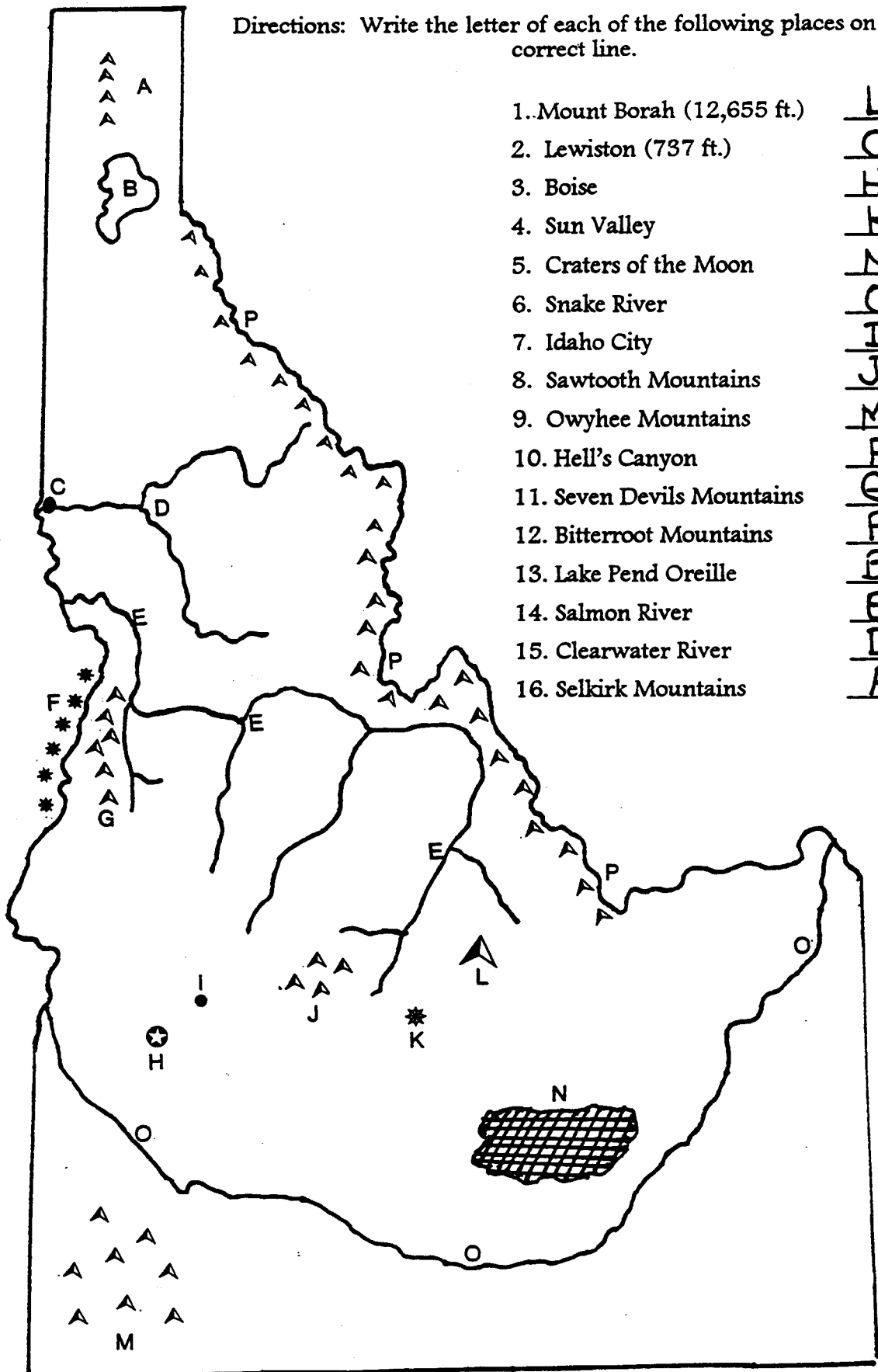


1. What direction would you travel to get from Salmon to Coeur d'Alene? _____
2. What direction is it from Boise to Twin Falls? _____
3. What direction is Lewiston from Moscow? _____
4. What direction would you travel to get to Coeur d'Alene from Nampa? _____
5. Salmon is located what direction from Boise? _____
6. Idaho Falls is _____ of Boise.
7. Caldwell is _____ of Idaho Falls
8. Twin Falls is what direction from Idaho Falls? _____



Where Is It?

Directions: Write the letter of each of the following places on the correct line.



1. Mount Borah (12,655 ft.)
2. Lewiston (737 ft.)
3. Boise
4. Sun Valley
5. Craters of the Moon
6. Snake River
7. Idaho City
8. Sawtooth Mountains
9. Owyhee Mountains
10. Hell's Canyon
11. Seven Devils Mountains
12. Bitterroot Mountains
13. Lake Pend Oreille
14. Salmon River
15. Clearwater River
16. Selkirk Mountains

	L
	C
	H
	K
	Z
	O
	H
	J
	M
	E
	G
	P
	B
	E
	D
	A

Interesting Names

Can you discover the city or town from the clues? Use an Idaho road map to help you with the names.

1. Very, very happy Bliss
2. Found in the sky at night Star
3. A fish Salmon
4. Our state -tumbling down Idaho Falls
5. Where your money earns interest Banks
6. Honey tastes very Sweet
7. My house in the high hills Mountain Home
8. A large sight Grand View
9. The bill collector says you must Payette
10. The opposite of tamer Wilder
11. President during the Civil War Lincoln
12. A group of people elected to help run a city Council
13. To squat down low Crouch
14. The capital of France Paris
15. The bird that is our national symbol Eagle
16. Put this on cereal to make it sweet Sugar (City)
17. One of our founding fathers Franklin
18. Brothers, the same age, trip Twin Falls
19. Bouncing pop Soda Springs
20. A snowy-colored fowl White Bird
21. Thanks before a meal Grace
22. A storage place for dishes Cabinet
23. A pen for horses Corral
24. Food for horses in a bear's home Hayden
25. A special place for plants in a large town Garden City
26. The winner of a race is the Victor
27. The tip of a spikey dune Sandpoint
28. What the baseball coach says to the outfielders Ketchum